
FIRST GRADE-MATH (MATH1_5)

1. Look at the number pattern below.






Which numbers belong in the empty circles?

- A. 91, 92
- B. 98, 91
- C. 89, 91

-
2. Which shape comes next in the pattern below?



- A. 
- B. 
- C. 

-
3. What is the next color in the pattern below?

Red Red Green Blue Red Red _____


- A. Red
- B. Green
- C. Blue

-
4. Which letter comes next in the pattern below?




W, X, Y, Z, W, X, Y, Z, W, _____

- A. X
- B. Y
- C. Z

5. Look at the pattern below.



Which belongs in the pattern?

- A. 
- B. 
- C. 

6. Which number comes next in the pattern below?

3, 4, 5, 3, 4, 5, ____

- A. 3
- B. 4
- C. 5

7. Look at the pattern of numbers below.

1, 3, 2, 4, 1, 3, 2, 4, 1, 3

If the pattern continues, which number will come next?

- A. 1
- B. 2
- C. 3

8. Which number comes next in the pattern below?

2, 2, 5, 5, 3, 2, 2, 5, ____

- A. 2
- B. 3
- C. 5

9. What comes next in the pattern below?

3, 5, 3, 5, 3, 5, 3, ___

- A. 3
- B. 4
- C. 5

10. Look at the numbers below.

67	68		70	
----	----	--	----	--

Which numbers belong in the empty boxes?

- A. 69, 71
- B. 71, 72
- C. 66, 69

11. Look at the pattern below. Which coin is missing?




- A.
- B.
- C.

12. Look at the pattern below.



What comes next?

- A. 
- B. 
- C. 

13. Look at the number pattern below.

2, 4, 6, 8, 10, 12, _____

Which number comes next in the pattern?

- A. 13
- B. 14
- C. 16

14. What number comes next in the pattern below?

7, 8, 7, 8, 7, 8, _____

- A. 9
- B. 8
- C. 7

15. Look at the pattern below.

1, 22, 333, 4444,

Which is the next number?

- A. 5555
- B. 44444
- C. 55555

16. What is the next number in the pattern below?

1, 1, 2, 1, 1, 2, 1, _____

- A. 3
- B. 2
- C. 1

Copyright (c) 2002 by The Riverside Publishing Company. All Rights Reserved.

FIRST GRADE-MATH(MATH1_5)

(Answer Key)

1. 89, 91

2. 

3. Green

4. X

5. 


6. 3

7. 2

8. 5

9. 5

10. 69, 71

11. 

12. 

13. 14

14. 7

15. 55555

16. 1