

Name: _____ Date: _____

SECOND GRADE (MATH2_3)

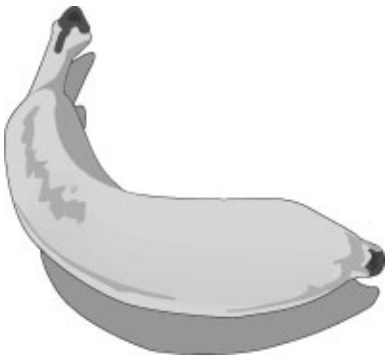
1. How do you know if something is a triangle?

- A. All of its sides are the same length.
 - B. It has 4 sides.
 - C. It has 3 corners.
-

2. Kiki has to measure the length of her room. Which of these should she use?

- A. liters
 - B. meters
 - C. kilograms
-

3. Look at the picture of the banana.



Which is best to use to tell how long a banana is?

- A. inches
 - B. feet
 - C. yards
-

4. How many sides does a rectangle have?

- A. 3
- B. 4
- C. 5

5. Reading class starts when the clock looks like this:



At what time does the reading class start?

- A. 3:50
- B. 10:03
- C. 10:15

6. What shape is this juice can?



- A. cone
- B. cylinder
- C. sphere

7. Tyrone started building a model plane at 3:00. He worked on the plane for 2 hours and 30 minutes. What time did he finish?

- A. 6:20
- B. 5:30
- C. 6:30

8. Which object could measure 4 hours?

A.



B.



C.



9. A centimeter is closest in length to

- A. an inch.
- B. a foot.
- C. a yard.

10. Look at the figure shown below.

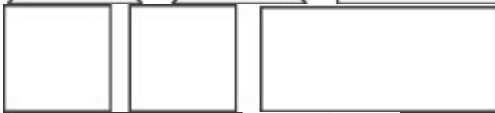


Which shapes were used to make the figure?

A.



B.



C.



11. Look at the picture below.



What is the boy trying to measure?

- A. the height of the puppy
- B. the weight of the puppy
- C. the temperature of the puppy

12. The Browns left home at the time shown on the clock below.



They got to the beach 35 minutes later. What time did they get to the beach?

- A. 9:25
- B. 11:20
- C. 11:35


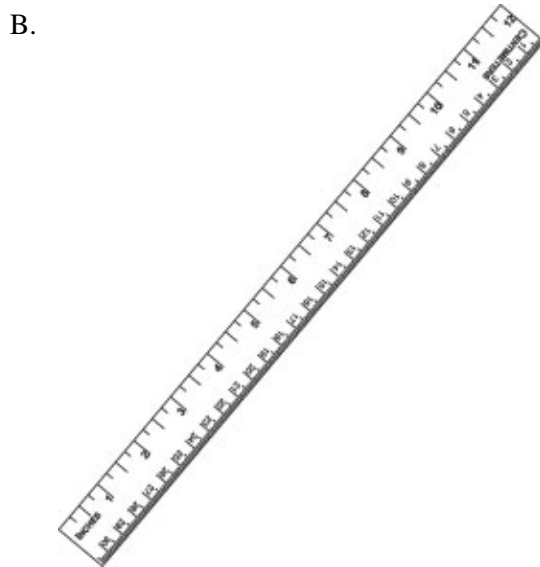
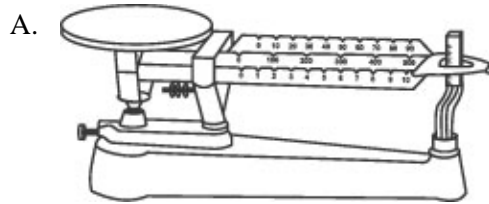
13. Which is most likely to be the length of a child's toothbrush?

- A. 3 inches
- B. 6 inches
- C. 12 inches

14. How many weeks are there in a year?

- A. 12
- B. 24
- C. 52

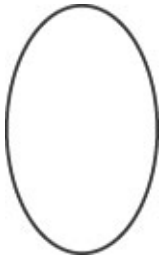
15. Which is the best tool to see how tall a door is?



16. Ben wants to weigh his dog.
Which is best to use to tell how much the dog weighs?

- A. inches
- B. pounds
- C. feet

17. Look at the shape below.



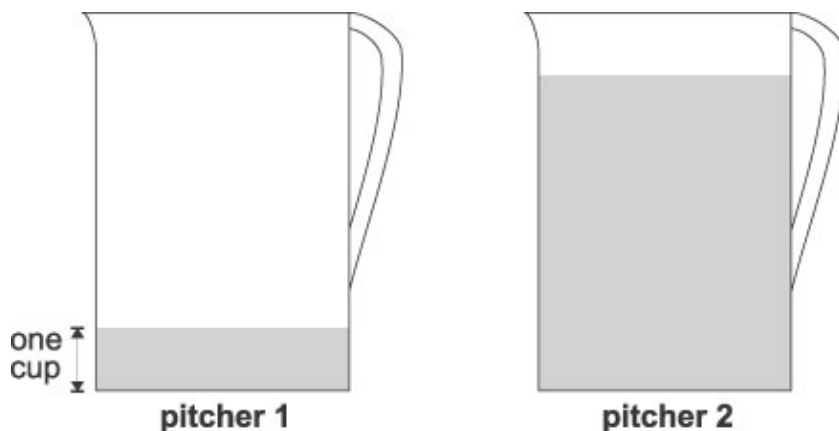
What shape is this?

- A. circle
- B. rectangle
- C. oval

18. Which of these is best to use to tell someone how much water would fit in a container?

- A. quarts
- B. pounds
- C. feet

19. Look at the two pitchers of lemonade below.



There is one cup of lemonade in pitcher 1. About how many cups of lemonade are in pitcher 2?

- A. 3 cups
- B. 5 cups
- C. 8 cups

20. Look at the ruler below.



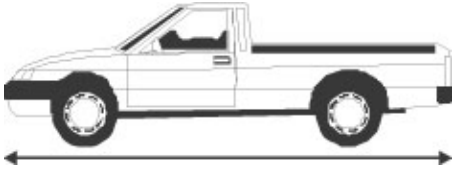
Which amount would the ruler BEST help you to measure?

- A. 10 inches
- B. 10 yards
- C. 10 miles

21. Which could you use in telling someone how tall you are?

- A. centimeter
- B. liter
- C. kilogram

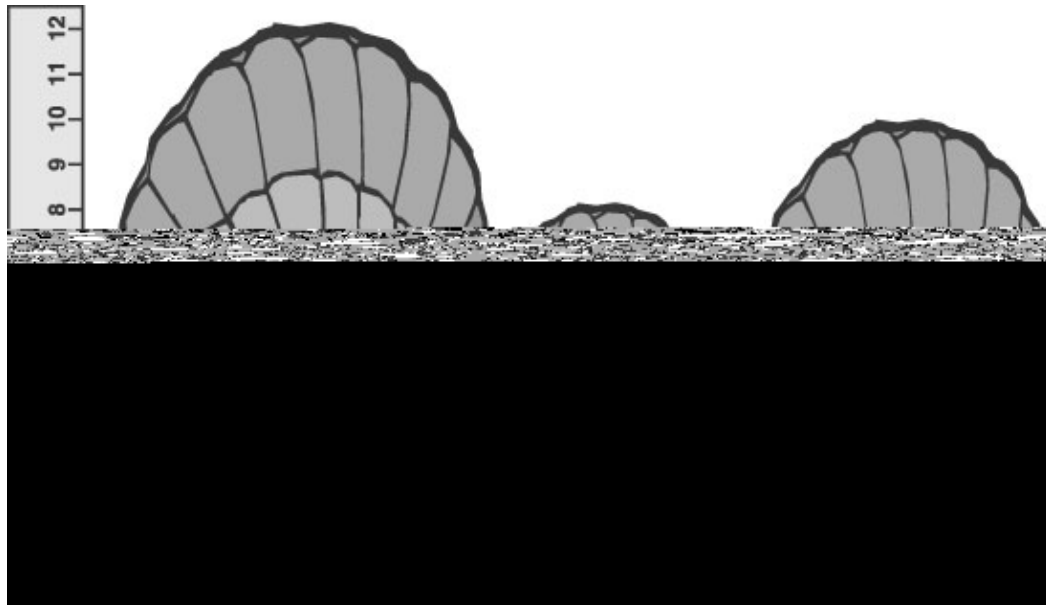
22. Look at the picture of the toy truck below.



About how many centimeters long is the truck?

- A. 4 centimeters
- B. 6 centimeters
- C. 8 centimeters

23. Look at the shells below.



Which shell is about 10 centimeters tall?

- A. shell A
- B. shell B
- C. shell C

24. What time does the clock show?

- A. 1:30
- B. 2:30
- C. 6:00

25. Look at the two fish below.

The bigger fish is 20 centimeters long. How long is the smaller fish?

- A. 18 centimeters
- B. 10 centimeters
- C. 2 centimeters

Copyright (c) 2002 by The Riverside Publishing Company. All Rights Reserved.

SECOND GRADE(MATH2_3)

(Answer Key)

1. It has 3 corners.

2. meters

3. inches

4. 4

5. 10:15

6. cylinder

7. 5:30

8.



9. an inch.

10.



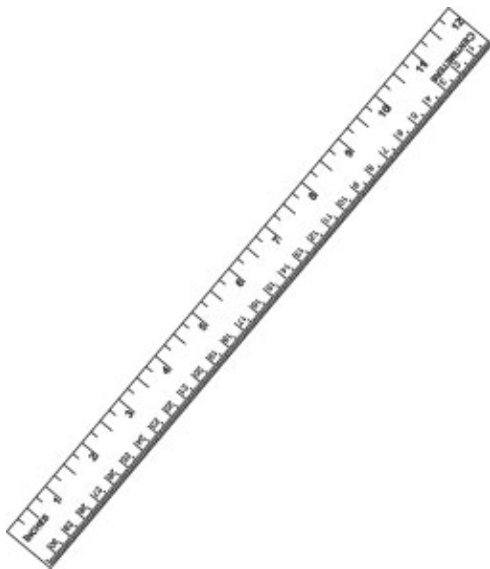
11. the weight of the puppy

12. 11:20

13. 6 inches

14. 52

15.



16. pounds

17. oval

18. quarts

19. 5 cups

20. 10 inches
21. centimeter
22. 6 centimeters
23. shell C
24. 1:30
25. 10 centimeters