

## SECOND GRADE-MATH (MATH2\_5)

---

1. Look at the objects below.



straw



pencil



can of soda

How are these objects alike?

- A. They do the same thing.
  - B. They are the same size.
  - C. They are the same kind of shape.
- 

2. Five rabbits were on a bench.  
Three of them left to get lunch.

Two of them left to go home.

How many rabbits were left?

- A. all
  - B. some
  - C. none
- 

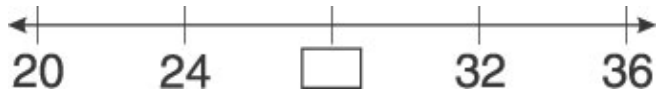
3. Which number comes next?

**818, 819, \_\_\_\_\_**

- A. 810
- B. 820
- C. 900

---

4. Look at the number line below.

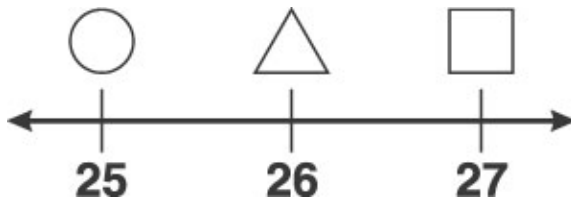


Which number is missing?

- A. 25
- B. 28
- C. 31

---

5. At what point is the circle located?



- A. 25
- B. 26
- C. 27

---

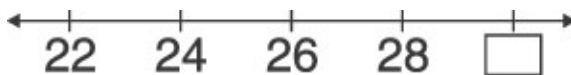
6. Which number belongs in the box?



- A. 69
- B. 70
- C. 76

---

7. Which number belongs in the box?



- A. 20
- B. 29
- C. 30

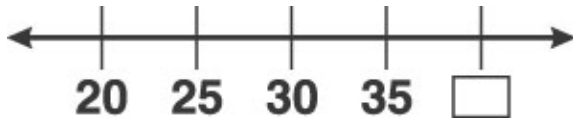
---

8. What number is one less than 35?

- A. 25
- B. 34
- C. 36

---

9. Which number belongs in the box?



- A. 36
- B. 40
- C. 45

---

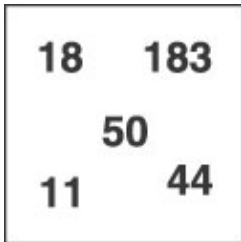
10. Which two letters come next in this pattern?

**A B C C A B C C A B C C A B C** \_\_\_\_ \_\_\_\_

- A. A B
- B. C A
- C. C C

---


11. What is true about all the numbers in the box below?



- A. They are all more than 10.
- B. They are all odd.
- C. They are all even.

---

12. Look at the animals below.



How many of the animals are dogs?

- A. all
- B. some
- C. none

---

13. What number is one more than 770?

- A. 780
- B. 777
- C. 771

---

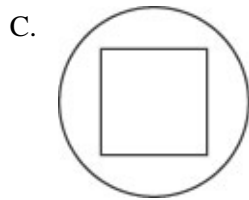
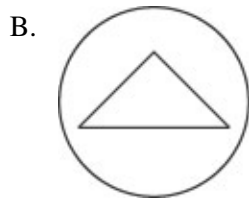
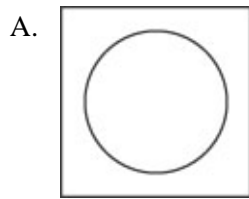
14. Which number should come next?

**518, 519, \_\_\_\_**

- A. 510
- B. 520
- C. 600

---

15. Which picture shows a square inside a circle?



---

16. Which number is one less than 110?




- A. 101
- B. 109
- C. 119

---

17. Look at the pattern below.



Which two shapes are next in the pattern?

- A. 
- B. 
- C. 

---

18. Lori has more than 20 marbles but fewer than 40. How many marbles could Lori have?

- A. 19
- B. 37
- C. 41

---

19. Which number comes next?

**878, 879, \_\_\_\_\_**

- A. 877
- B. 880
- C. 889

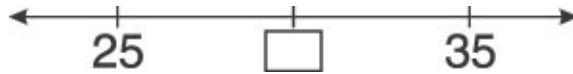
---

20. What number is one more than 220?

- A. 230
- B. 222
- C. 221

---

21. Which number belongs in the box?



- A. 26
- B. 30
- C. 40

---

22. Which comes next in the pattern?

**\$1.00, \$1.50, \$2.00, \_\_\_\_\_**

- A. \$3.50
- B. \$3.00
- C. \$2.50

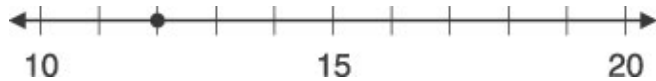
---

23. Which of these numbers is closest to 100?

- A. 97
- B. 109
- C. 112

---

24. Look at the number line below.



At which number is the dot?


- A. 11
- B. 12
- C. 13


Copyright (c) 2002 by The Riverside Publishing Company. All Rights Reserved.

## SECOND GRADE–MATH(MATH2\_5)

(Answer Key)

1. They are the same kind of shape.
2. none
3. 820
4. 28
5. 25
6. 70
7. 30
8. 34
9. 40
10. C A
11. They are all more than 10.
12. some
13. 771
14. 520
- 15.



16. 109
17. 
18. 37
19. 880
20. 221
21. 30
22. \$2.50
23. 97
24. 12